



Question bank
Grade 1- Maths
Chapter 14 – Handling Data

Questions

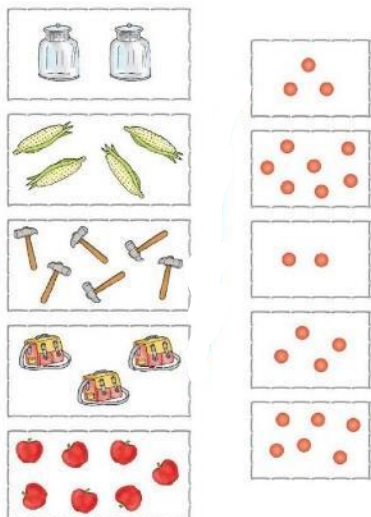
1. Count the shapes and write the number.



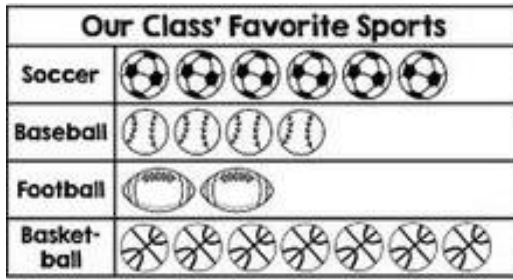
2. Draw 5  and colour them.



3. Count and match the following.



4. Answer the questions about the picture graph.



1. Write how many kids like each sport.

 _____  _____  _____  _____

TMS